

Name Solutions

## Graphing Review

### Introduction

Line graphs compare two variables. Each variable is plotted along an axis. A line graph has a vertical axis and a horizontal axis. For example, if you wanted to graph the height of a ball after you have thrown it, you would put time along the horizontal, or x-axis, and height along the vertical, or y-axis.

### Line graphs are important in science for several reasons such as:

- showing specific values of data. If one variable is known, the other can be determined.
- showing trends and relationships in data clearly. They visibly depict how one variable is affected by the other as it increases or decreases.
- allowing the viewer to make predictions within recorded data, called **interpolation**, and to make predictions about data not yet recorded, called **extrapolation**.

### Interpolation vs. Extrapolation

Determine which of the examples below is interpolation and which is extrapolation. Explain why.

1. The value of Sarah's car in 2004 was \$17,500. interpolation. 2004 was measured at that time.
2. The value of Sarah's car in 2017 is \$1,900. extrapolation. 2017 hasn't happened yet, it's in the future.

### How to Construct a Line Graph:

1. Identify the Variables & Label the Axes
  - a. **Independent Variable** – factor that is varied in an experiment and specifically controlled by the experimenter
    - i. Label along the x-axis (horizontal) – include units
    - ii. Typically found on the left side of a data table
  - b. **Dependent Variable** – factor that is measured in an experiment and will change as a result of the independent variable
    - i. Label along the y-axis (vertical) – include units
    - ii. Typically found on the right side of a data table

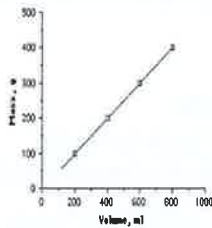
#### Independent vs. Dependent Variable Practice

- A student wanted to observe how changing the temperature of the aquarium water would affect the breathing rate of his goldfish.
  - What is the independent variable? temperature of the water
  - What is the dependent variable? breathing rate
- A student wanted to determine how tall corn would grow if different types of fertilizer were used.
  - What is the independent variable? type of fertilizer
  - What is the dependent variable? height of the corn

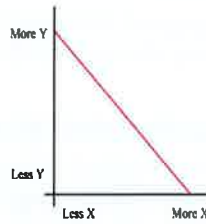
2. Determine the Graph Scale
  - a. Determine the magnitude (numeric value) of each variable
  - b. Establish a scale that best fits the range of each variable
  - c. Spread the graph to use the MOST available space (use at least  $\frac{3}{4}$  of the graph)
  - d. Be consistent throughout each axes' scale
3. Plot the data points
  - a. Plot each data value on the graph with a dot
  - b. If multiple sets of data are being plotted, use different colored lines and include a key

4. Draw the Graph

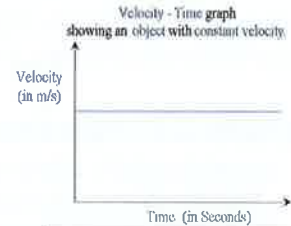
- a. DO NOT connect the dots unless specifically told to do so
- b. Draw one of the following types of graphs:
  - i. Best fit Straight Line



**DIRECT RELATIONSHIP**  
-Both variables increase together

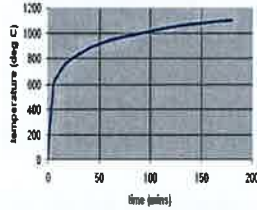
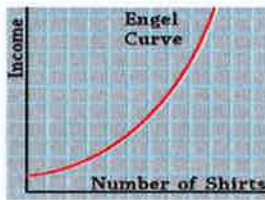


**INDIRECT RELATIONSHIP**  
-As one variable increases, the other decreases

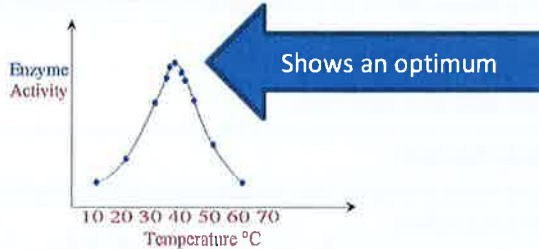


**CONSTANT RELATIONSHIP**  
-Change in one variable has no effect on the other

- ii. Best fit Curved Line



- iii. Best fit Peak Line



5. Title the Graph

- Include a descriptive title that explains what kind of plot it is, the technique that was used, which substance was measured, and what instrument was used to measure it.
- **IMPORTANT:** Titles should not include (or be) "Plot of...", "Graph of...", or "...over a range of data points." - Be concise, but complete.

Graphing information can be found in your textbook on p. 815.

## Graphing Practice

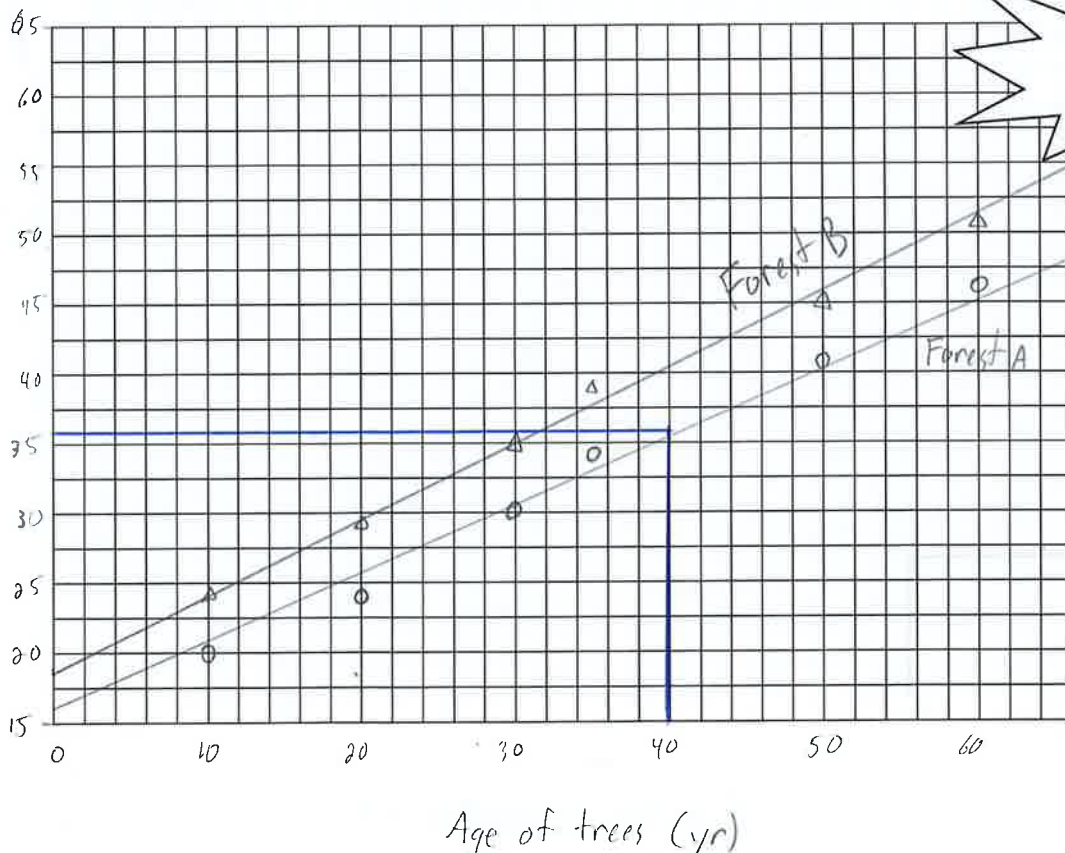
### Practice Problem #1

Background: The thickness of the annual rings indicates what type of environmental situation was occurring the time of the tree's development. A thin ring usually indicates a rough period of development such as lack of water, forest fires, or insect infestation. On the other hand, a thick ring means a prosperous period of development. Use the information from the data table below to create a proper scientific graph and to answer the corresponding questions.

| Age of Trees (in years) | Average Thickness of Annual Rings in Forest A (millimeters) | Average Thickness of Annual Rings in Forest B (millimeters) |
|-------------------------|---|---|
| 10                      | 20  | 24  |
| 20                      | 24  | 28  |
| 30                      | 30  | 35  |
| 35                      | 34  | 38  |
| 50                      | 41  | 45  |
| 60                      | 46  | 51  |

1. What is the dependent variable? thickness
2. What is the independent variable? Age of trees
3. What was the average thickness of annual rings for 40 year old trees in Forest A? (see graph) 36mm
4. What is it called when you make predictions within given data, such as made in question #3? interpolation
5. What was the mean thickness of annual rings for all trees found in Forest B?  $(24+28+35+38+45+51)/6 = 37mm$
6. Based on the data shown, what can be concluded about the comparative health of Forest A & B? Forest B is healthier because the average thickness of rings is consistently larger
7. What type of relationship (constant, direct, or indirect) exists between the age of trees and the average thickness of the tree's rings? Explain. Direct. There is a straight line that can be drawn between the points.

Aug.  
Thickness  
of Annual  
Rings (mm)



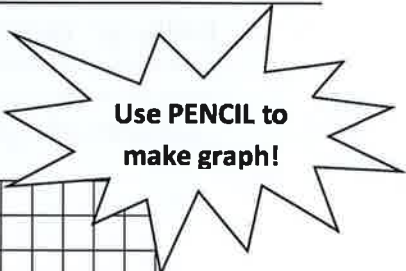
Use PENCIL to make graph!

### Practice Problem #2

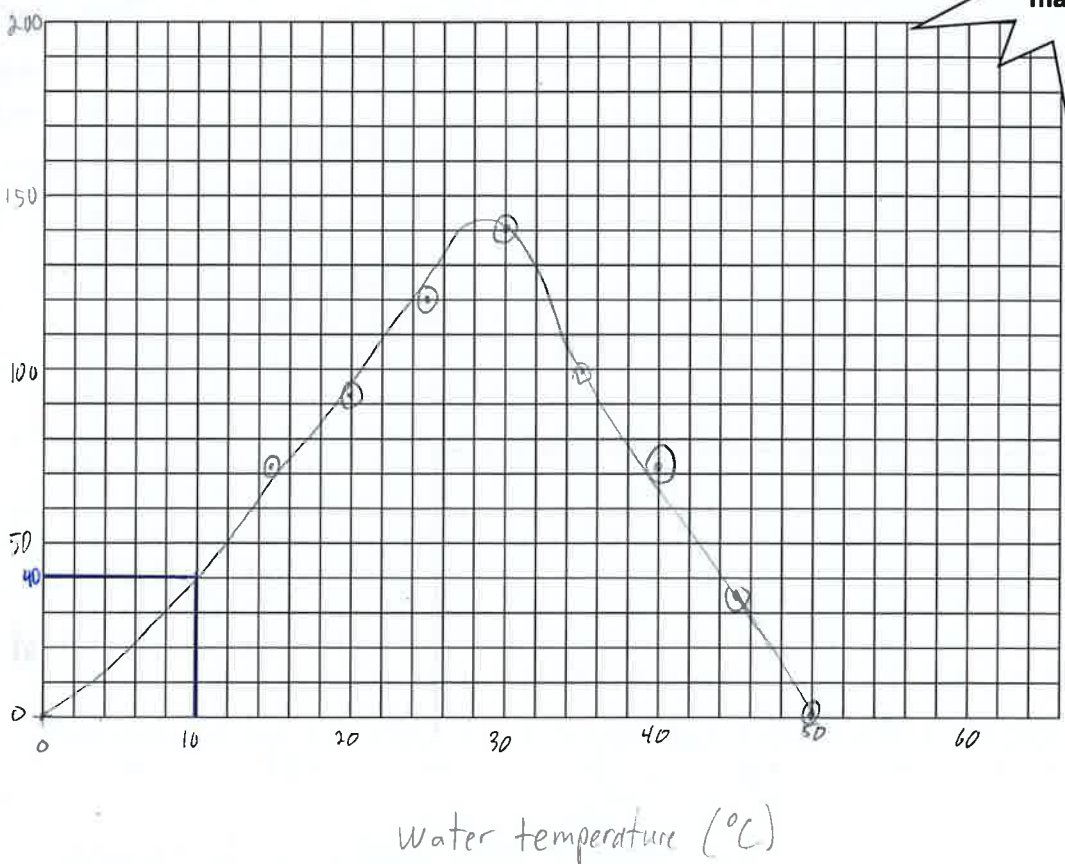
Background: Clams were placed into various temperatures of water. Use the information in the data table below in order to create a proper scientific graph and to answer the corresponding questions.

| Water Temperature (°C) | Number of Developing Clams |
|------------------------|----------------------------|
| 15                     | 72                         |
| 20                     | 92                         |
| 25                     | 120                        |
| 30                     | 140                        |
| 35                     | 99                         |
| 40                     | 72                         |
| 45                     | 36                         |
| 50                     | 0                          |

1. What is the dependent variable? Number of clams
2. What is the independent variable? Water temp.
3. What is the optimum temperature for clam development? 29°C
4. What is the mean number of clams per sample?  $(72+92+120+140+99+72+36+0)/8 = 79$
5. Approximately how many clams would be developing in 10 degree Celsius water? (see graph) 40 clams
6. What is it called when you make predictions about data not yet recorded, such as the prediction we made in question number 5? extrapolations



Number of Clams



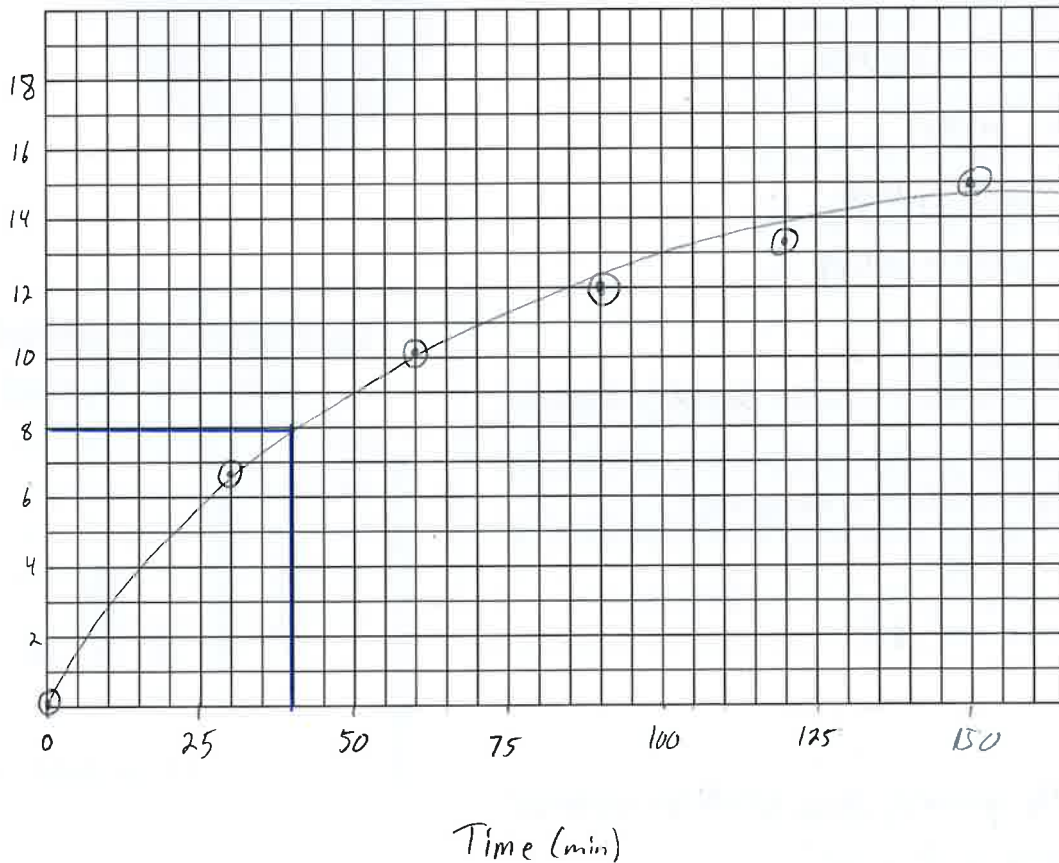
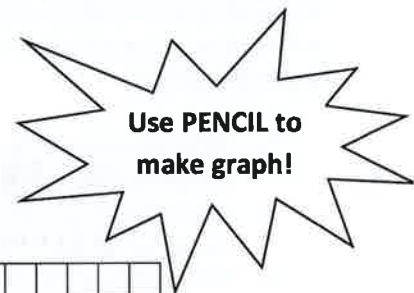
### Practice Problem #3

Background: Natalie sets out to run 15 kilometers. Every 30 minutes she checked her pedometer to determine how far she had run. Use the data below to create a proper scientific graph and to answer the corresponding questions.

| Time (minutes) | Total Distance (km) |
|----------------|---------------------|
| 0              | 0                   |
| 30             | 6.8                 |
| 60             | 10.1                |
| 90             | 12                  |
| 120            | 13.3                |
| 150            | 15                  |

1. What is the dependent variable? Total distance
  2. What is the independent variable? Time
  3. How many kilometers had Natalie run after 40 minutes? (see graph) 8 km
  4. What was Natalie's average speed (in kilometers per hour) over the course of her run? 6.0 km/hr
- Use the formula Speed = Distance / Time

$$\begin{aligned}
 \text{speed} &= \frac{\text{distance}}{\text{time}} \\
 &= \frac{15 \text{ km}}{150 \text{ min}} \times \frac{60 \text{ min}}{1 \text{ hr}} \\
 &= 6 \text{ km/hr}
 \end{aligned}$$

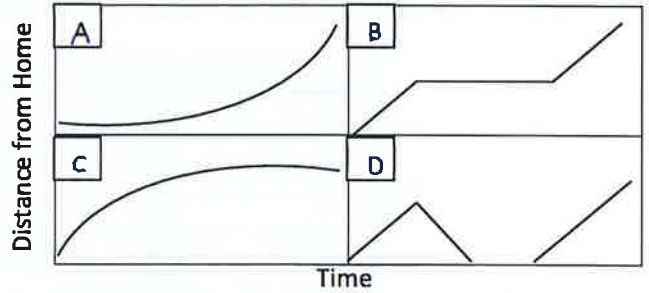


Name \_\_\_\_\_

### Practice #4

Background: Match each story on the left with the graph it represents on the right. Each graph compares the distance a car is from home compared to time.

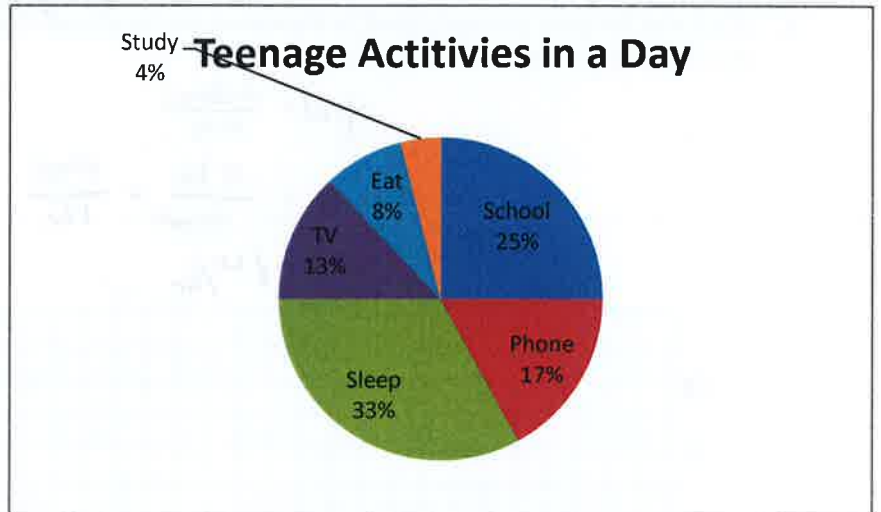
- D 1. I had just left home when I realized I had forgotten my books, so I went back to pick them up.
- C 2. The battery on my electric car started to run down.
- B 3. Things went fine until I had a flat tire.
- A 4. I started out calmly, but sped up when I realized I was going to be late.



### Practice Problem #5

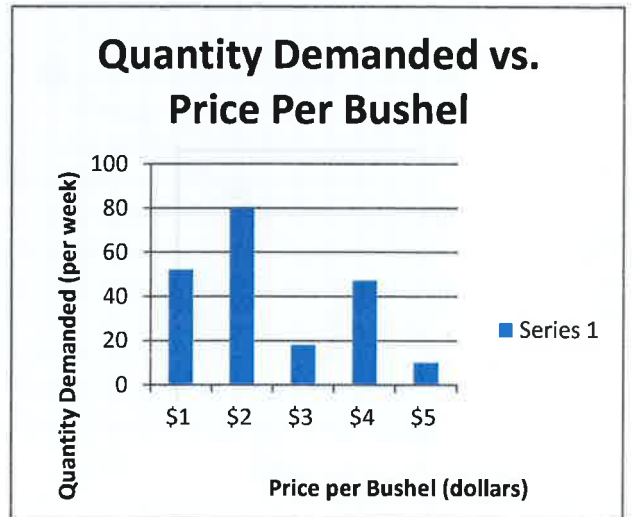
Background: The pie chart shows the approximate percentages teenagers spend doing various activities in a day. Use the information in the pie chart to answer the questions below.

- 1. What percent of the day is spent watching TV? 13%
- 2. How many hours are spent sleeping?  $0.33 \times 24 = 8 \text{ hr}$
- 3. What activity takes up the least amount of time? Studying
- 4. What activity takes up a quarter of the day? School
- 5. What two activities take up 50% of the day? sleep & phone
- 6. What two activities take up 25% of the day? phone & eating



### Practice Problem #6

- 1. What is the dependent variable? Quantity demanded
- 2. Does the price per bushel always increase with demand? Question is asked the wrong way!
- 3. What is the quantity demanded when the price is \$5 per bushel? 10
- 4. What is the price per bushel when the quantity demanded is 80? \$2



Does the quantity demanded always increase/decrease with price?

No, the quantity changes both up and down as the price per bushel increases. (no pattern).